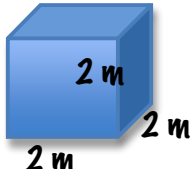


Name \_\_\_\_\_ Date \_\_\_\_\_ Hour \_\_\_\_\_

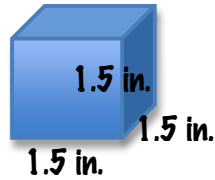
## Volume of a Cube

Find the volume of each cube. Round each answer to the nearest hundredth. Show all 3 lines of work!!

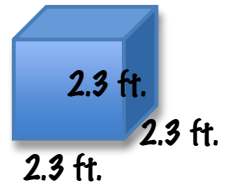
1)



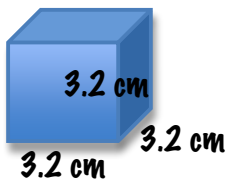
2)



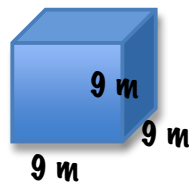
3)



4)



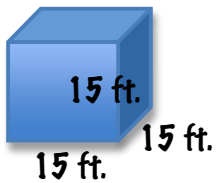
5)



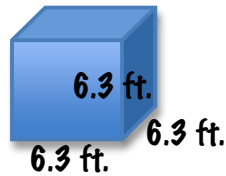
6)



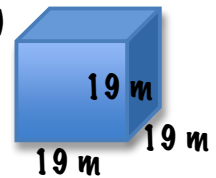
7)



8)



9)



Name \_\_\_\_\_ Date \_\_\_\_\_ Hour \_\_\_\_\_

## Volume of a Rectangular Prism

Find the volume of each rectangular prism. Show all 3 lines of work!!


1)



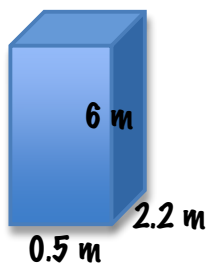
2)



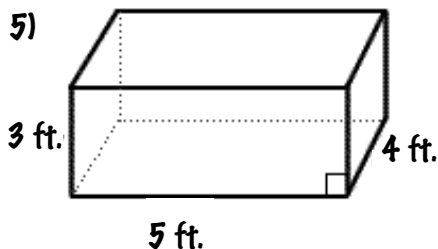
3)



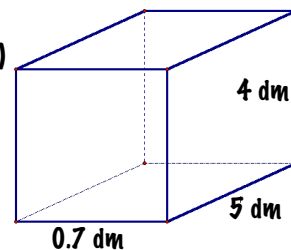
4)



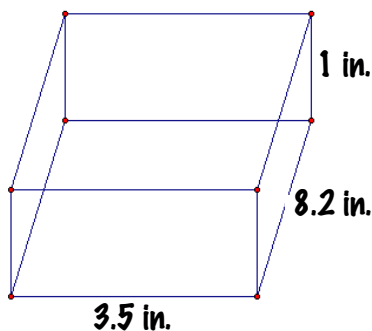
5)



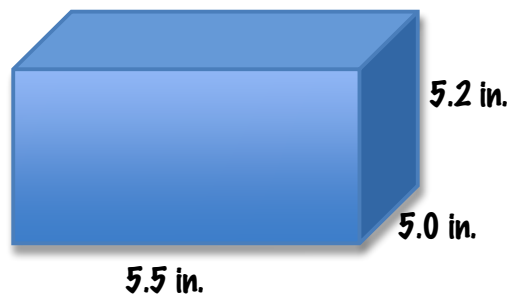
6)



7)



8)



Name \_\_\_\_\_ Date \_\_\_\_\_ Hour \_\_\_\_\_

# Volume of a Triangular Prism

Find the volume of each triangular prism. Show all 3 lines of work!!

